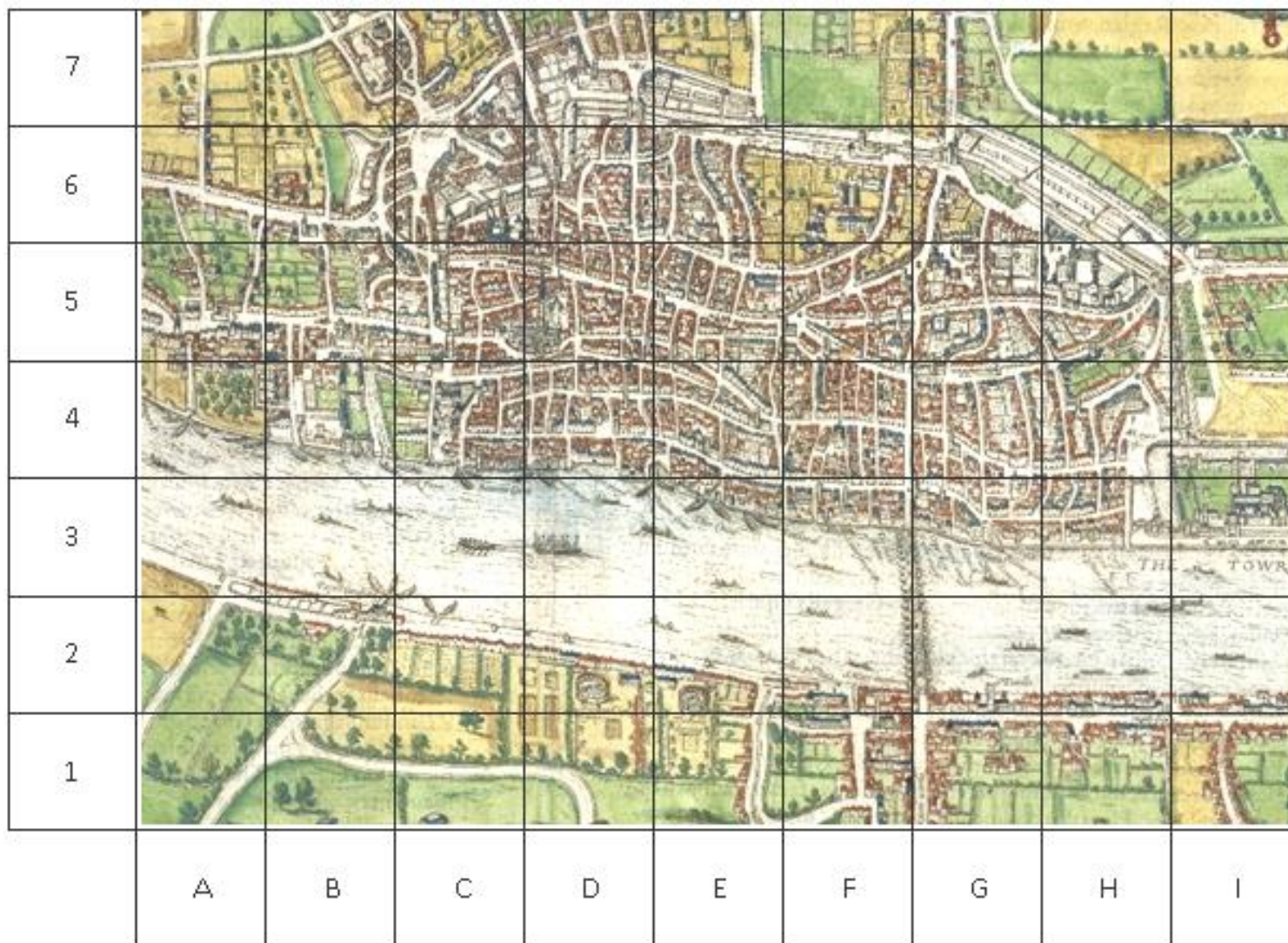








## Map of London - 1666



Mark the parts of London in the Great Fire of London

Use this symbol	Name of area	Grid reference
	Pudding Lane (the small vertical road in the left corner)	<b>G4</b>
	Seething Lane (home of Samuel Pepys)	<b>H4</b>
	London Bridge	<b>F3 to G2</b>
	Spital Fields	<b>H7</b>
	Moor Fields	<b>F7</b>
	Tower of London	<b>I3</b>

Colour the following squares red to show where the fire spread: **B4, B5, C4, C5, D4, D5, D6, E4, E5, E6, F3, F4, F5, G3, G4, H3**



**Vlad and the Great Fire of London** available from Amazon



[www.readingriddle.co.uk](http://www.readingriddle.co.uk)